


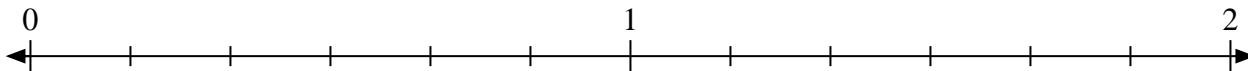


Solve each problem.

- 1) Mark the location of
- $\frac{9}{7}$



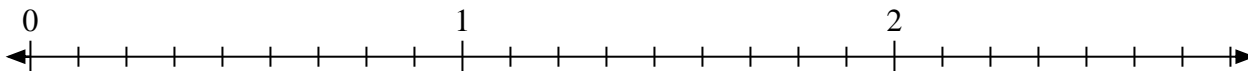
- 2) Mark the location of
- $\frac{7}{6}$



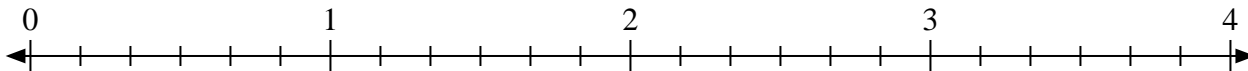
- 3) Mark the location of
- $\frac{5}{4}$



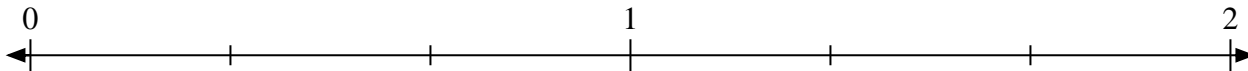
- 4) Mark the location of
- $\frac{23}{9}$



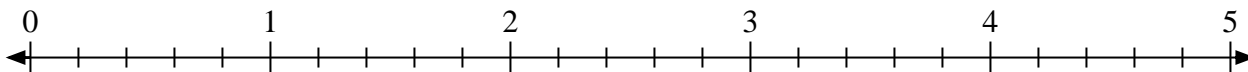
- 5) Mark the location of
- $\frac{16}{6}$



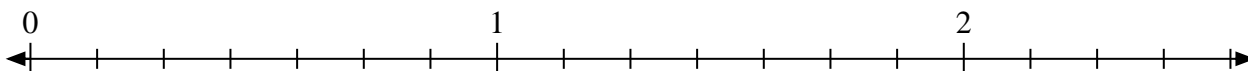
- 6) Mark the location of
- $\frac{5}{3}$




- 7) Mark the location of
- $\frac{13}{5}$



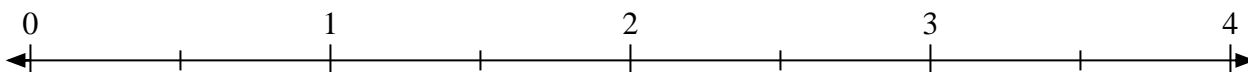
- 8) Mark the location of
- $\frac{8}{7}$



- 9) Mark the location of
- $\frac{8}{5}$




- 10) Mark the location of
- $\frac{5}{2}$



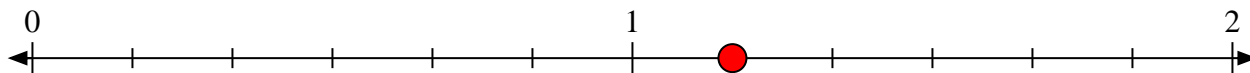


Solve each problem.

- 1) Mark the location of
- $\frac{9}{7}$



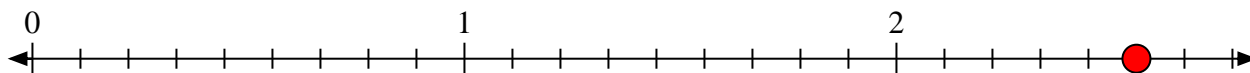
- 2) Mark the location of
- $\frac{7}{6}$



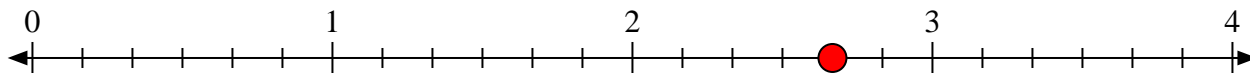
- 3) Mark the location of
- $\frac{5}{4}$



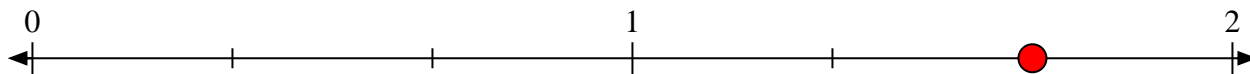
- 4) Mark the location of
- $\frac{23}{9}$



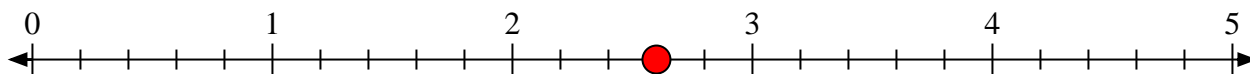
- 5) Mark the location of
- $\frac{16}{6}$



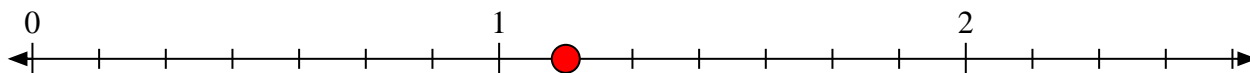
- 6) Mark the location of
- $\frac{5}{3}$




- 7) Mark the location of
- $\frac{13}{5}$



- 8) Mark the location of
- $\frac{8}{7}$



- 9) Mark the location of
- $\frac{8}{5}$



- 10) Mark the location of
- $\frac{5}{2}$

